

## Fairytale Maps

1. Circle either left or right to describe the location of the fairytale items. Is the castle left or right from the tree?

Left  Right  Left  Right 

2. Circle the key on the map below.



3. Draw your own key for the map below.



4. Use locational language to describe the position of the fairytale features on the map below.



The pirate ship is                     .  
The castle is                     .  
The unicorn is                     .  
The windmill is                     .

North  
West ——— East  
South

Teacher comments: \_\_\_\_\_

## The UK and its Capital Cities

1. Name the seven continents of the world.



1. \_\_\_\_\_  
2. \_\_\_\_\_  
3. \_\_\_\_\_  
4. \_\_\_\_\_  
5. \_\_\_\_\_  
6. \_\_\_\_\_  
7. \_\_\_\_\_

2. Label the countries that make up the United Kingdom on the map below.



What are the names of the capital cities of each country? Write them underneath each country.

3. Name a landmark in each of the countries that makes the United Kingdom.



4. Name the five aspects of the world.

5. Name the five aspects of the world.

6. Name the five aspects of the world.

7. Name the five aspects of the world.

8. Name the five aspects of the world.

9. Name the five aspects of the world.

10. Name the five aspects of the world.

11. Name the five aspects of the world.

12. Name the five aspects of the world.

13. Name the five aspects of the world.

14. Name the five aspects of the world.

15. Name the five aspects of the world.

16. Name the five aspects of the world.

17. Name the five aspects of the world.

18. Name the five aspects of the world.

19. Name the five aspects of the world.

20. Name the five aspects of the world.

21. Name the five aspects of the world.

22. Name the five aspects of the world.

23. Name the five aspects of the world.

24. Name the five aspects of the world.

25. Name the five aspects of the world.

26. Name the five aspects of the world.

27. Name the five aspects of the world.

28. Name the five aspects of the world.

29. Name the five aspects of the world.

30. Name the five aspects of the world.

31. Name the five aspects of the world.

32. Name the five aspects of the world.

33. Name the five aspects of the world.

34. Name the five aspects of the world.

35. Name the five aspects of the world.

36. Name the five aspects of the world.

37. Name the five aspects of the world.

38. Name the five aspects of the world.

39. Name the five aspects of the world.

40. Name the five aspects of the world.

41. Name the five aspects of the world.

42. Name the five aspects of the world.

43. Name the five aspects of the world.

44. Name the five aspects of the world.

45. Name the five aspects of the world.

46. Name the five aspects of the world.

47. Name the five aspects of the world.

48. Name the five aspects of the world.

49. Name the five aspects of the world.

50. Name the five aspects of the world.

51. Name the five aspects of the world.

52. Name the five aspects of the world.

53. Name the five aspects of the world.

54. Name the five aspects of the world.

55. Name the five aspects of the world.

56. Name the five aspects of the world.

57. Name the five aspects of the world.

58. Name the five aspects of the world.

59. Name the five aspects of the world.

60. Name the five aspects of the world.

61. Name the five aspects of the world.

62. Name the five aspects of the world.

63. Name the five aspects of the world.

64. Name the five aspects of the world.

65. Name the five aspects of the world.

66. Name the five aspects of the world.

67. Name the five aspects of the world.

68. Name the five aspects of the world.

69. Name the five aspects of the world.

70. Name the five aspects of the world.

71. Name the five aspects of the world.

72. Name the five aspects of the world.

73. Name the five aspects of the world.

74. Name the five aspects of the world.

75. Name the five aspects of the world.

76. Name the five aspects of the world.

77. Name the five aspects of the world.

78. Name the five aspects of the world.

79. Name the five aspects of the world.

80. Name the five aspects of the world.

81. Name the five aspects of the world.

82. Name the five aspects of the world.

83. Name the five aspects of the world.

84. Name the five aspects of the world.

85. Name the five aspects of the world.

86. Name the five aspects of the world.

87. Name the five aspects of the world.

88. Name the five aspects of the world.

89. Name the five aspects of the world.

90. Name the five aspects of the world.

91. Name the five aspects of the world.

92. Name the five aspects of the world.

93. Name the five aspects of the world.

94. Name the five aspects of the world.

95. Name the five aspects of the world.

96. Name the five aspects of the world.

97. Name the five aspects of the world.

98. Name the five aspects of the world.


99. Name the five aspects of the world.

100. Name the five aspects of the world.




Teacher comments: \_\_\_\_\_

## Farming


1. Draw a line to show where these places are on the world map below.

United Kingdom  India   
 China


2. Draw a line from the image to the correct type of farming.

 Rice farming in India  
 Terrace farming in China  
 Farming in Britain

3. Write the name of the season when most animals born on the farms below.



4. Use locational language to describe the position of the farmyard features on the map below.



The pond is                     .  
The house is                     .  
The scarecrow is                     .  
The bridge is                     .

North  
West ——— East  
South

Teacher comments: \_\_\_\_\_

## Rainforests

1. Draw lines to show where you can find the rainforests on the world map below.



Amazon rainforest Rainforests of South East  
 Congo rainforest Rainforests of South East  
 Central American rainforests Rainforests of South East  
 Dipterocarp rainforest

2. Draw a line to show the layers of the rainforest.



Canopy  
Emergent  
Forest floor  
Understory

3. Explain where in the world you would find rainforests. Use the word bank below to help you.

Water Tropics of Cancer Tropics of Capricorn

4. Explain what is it like in the forest floor and what animals you would find here.



5. Circle the word (climate zone) you would find rainforests in.



Polar Temperate Arid Tropical Mediterranean

6. How is this different to our playground?

Teacher comments: \_\_\_\_\_

## Where does food come from?

1. Draw lines to show where on the map the different foods come from.



Oranges  Bananas  Feta Cheese  Wheat  Corn  Coconut  Malt 

2. Write a sentence to explain what Fairtrade is.

Fairtrade is                     

3. Create a colour coded key next to the list of the world to show where they are on the map.



Tropical Rainforest  To  
 Desert  T  
 Tundra  T  
 Savanna  T

4. On this map, use two colours to shade where arable and pastoral farming is mainly based in the UK.



Pastoral farming is                       
 Arable farming is                     

5. Name 2 reasons why food is                     .

1. \_\_\_\_\_  
2. \_\_\_\_\_

6. Why are different to the year in the UK?

Teacher comments: \_\_\_\_\_

## France

1. Draw lines to show where France is on the world map below.



France

2a. What continent does France belong to?



2b. What is the name of the sea that is to the left of France?

3. Name 3 aspects of French culture.

1. \_\_\_\_\_  
2. \_\_\_\_\_  
3. \_\_\_\_\_

4. On the tourist map below, draw arrows to show the different examples of human features in Paris that tourists might want to visit.



4a. Why else might people want to visit in France?

5. Write 2 sentences below to compare the climate in France to the climate in the UK.

6. Circle the picture that shows Paris (France).



Teacher comments: \_\_\_\_\_

## Rivers

1. Label the features of a river.

source tributary oxbow lake



mouth meander confluence

2. Write the 4-figure grid reference for                     .



3a. Draw arrows to show where three rivers are located in the UK and name them.



3b. Label the River Tees on the map.

4. Explain how a river is formed.

5. Explain how rivers change over time.

6. Match the river to its location in the world.

Yangtze	Egypt
Mississippi	China
Nile	Russia
Volga	North America

Teacher comments: \_\_\_\_\_

## Tremors

1. Draw a line to label the pictures with the type of volcano.



Composite Cinder Shield

2. Draw a line to show where the major volcanoes located on the world map below.



Mount Vesuvius Mount Los

3. What is the Ring of Fire and where is it located?



4. Explain how earthquakes occur.



5. Label the cross section of the volcano below.



6. Match the extreme weather to the picture.

Hurricane  
Tornado  
Wildfire

Teacher comments: \_\_\_\_\_

## Sustainability

1. Circle the energy sources below which are renewable.



2. List three human actions which are having a negative impact on the planet.

1. \_\_\_\_\_  
2. \_\_\_\_\_  
3. \_\_\_\_\_

3. Describe the role COP has and name some of its pledges.

4. Use the image below to support you. What are some of the consequences of global warming? Give detail to your answer.



5. What are some things you can do to help to save the planet?

Teacher comments: \_\_\_\_\_